



Gobindgarh Public School

**Cambridge
Primary**

**Cambridge Assessment International Education
Holidays Home Work (2019-20)**

My Vacation Journal

A "vacation
homework"
solution!




By Lakshya Singh Teacher Resources - 2017

SCIENCE



A) Look at the objects below. Some are made of wood, some are made of plastic, some are made of glass and some are made of metal. Write wood, plastic, glass or metal under each picture.



Lock



Pencil box



Glass



Water bottle



Pencil



Fry pan



Chair



Iron nail



Bulb



Bucket



Screw driver



Magnet

B Complete the table with ticks and crosses.



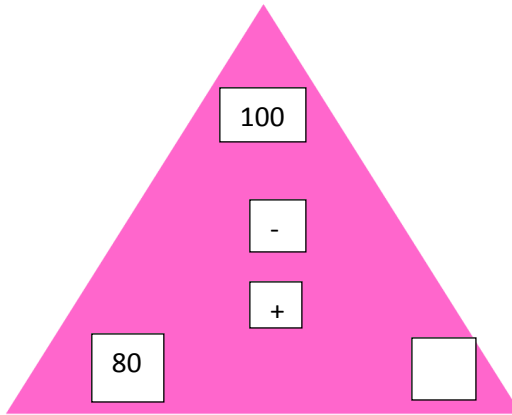
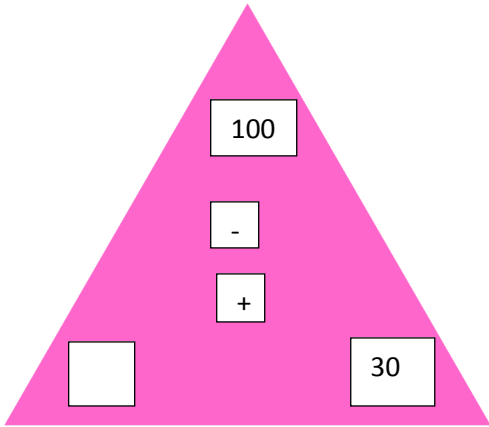
Object	Material	Bend	Squash	Stretch	Twist	Is it rigid or flexible?	Is it elastic?
Eraser							
Sponge							
Ruler							
Elastic band							
String							
Ball							
Fabric							
Plastic straw							
Metal spoon							
Playdough							
Piece of wood							
Stone							
Record how many objects changed shape.							

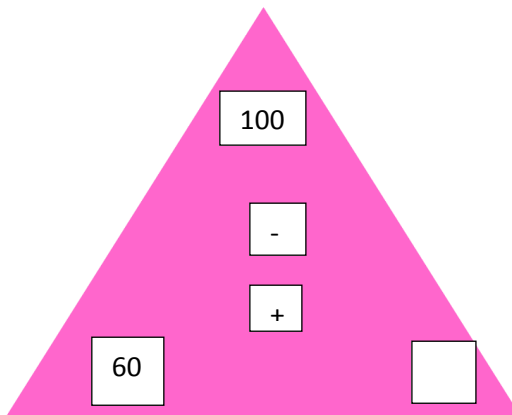
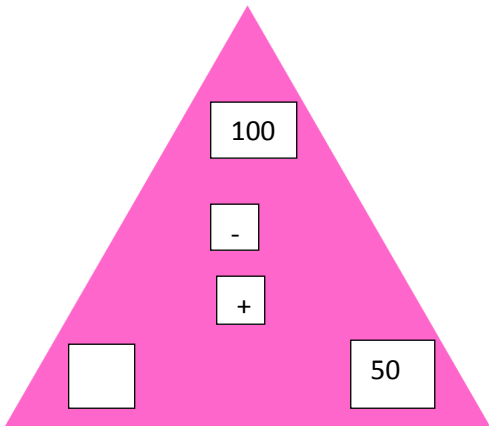
Note: Learn the Q/Ans and Fill ups of L- Changing Material from note book.

MATHS






A Complete the addition and subtraction facts of triangle family fact of the number pair to 100.





B Whenever you visit supermarkets or whenever you go for outings, observe the places and find different materials in different shapes. Make a list including the material name(paste the picture of the material with name), name of the shape and draw the picture of the shape. Make a list of atleast 6 items. (Do it on a A-4 Size sheet) One example is given here:



S. NO.	MATERIAL	NAME OF THE SHAPE	PICTURE OF THE SHAPE
	<p data-bbox="252 510 456 544">Photo frame</p> 	<p data-bbox="603 510 764 544">Rectangle</p>	
2			
3			
4			
5			
6			
7			

Note: Learn tables 2 to 7 and revise class work.

ENGLISH



A Write the following sentences with correct punctuation marks.

1 we have summer holidays in may and june

2 wow its so beautiful

3 patna is a capital of bihar

4 how many pencils should i carry to school

5 jack named his cow daisy

6 ali and hari are neighbours

7 hurray we have won the match

8 did you leave your book in the library

9 the lotus temple is in new delhi

10 which river flows through kolkata

B Look at the picture below and make sentences using the words given .

B



swings, slide, see-saw, children, benches

C Make any poster of Good Manners by taking help of the following hints.

- 1 Magic Words (Thank you, Sorry , Please etc.)**
- 2 Things that are important in your school.**
- 3 Things that are important at your home.**

Note : Learn poem Tea with Aunty Mabel and learn Q/Ans and dictation words from note book.

