







Gobindgarh Public School Cambridge International Examinations

Cambridge
Primary

Class – II CAIE



It's summer time,
School vacation has begun,
Time for children to play
And have fun in the sun,
Now the children are out of school,
There are trees to climb,
Swimming in the pool
Time to spend, with special friends

Dear student,

Enjoy the Summer Vacation from June 1 to July 7th, 2019. The school would reopen on 8th July, 2019.

- Summer Vacation is the best and the most fruitful time for learning and nurturing creativity. Keeping this objective in mind we have planned diverse and exciting activities that will enhance your knowledge and boost your creativity.
- “Knowledge is Power”. Therefore read lots of books to cultivate the reading habit and develop your vocabulary, language skills, increase your attention span and improve your spellings.
- “A healthy mind lives in a healthy body”. So go out and play the sport of your choice. It will help to instill discipline, generate sporting spirits and channelize your energies constructively.
- Eat healthy food and drink lots of water during summer.
- Revise all the work done in the class . Revise the tables from 2 to 12.
- All homework should be handwritten and neatly done on A4 size sheets, stapled subject wise and put together in a common folder.

That time of year's come round again,
So we wish you all the best
The joy that comes from knowing you
Makes us feel that we have been blessed.
So we'll share with our feelings
At this special time of year:
May your holidays be a delight,
Filled with happiness and cheer.
HAPPY HOLIDAYS!



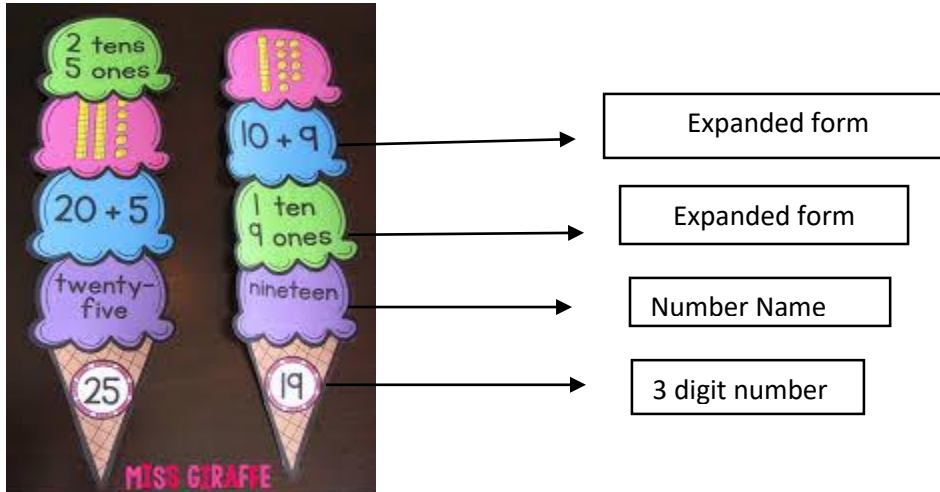
Fun with mathematics

1. Place Value Sundae Cone:-

a) Take colourful A-4 Size sheets and cut out shapes of an ice cream cone and 3 scoops.

b) Take any 3 digit no. and show its standard word form and expanded form on the cutouts of the cone as shown in the picture given below:- (Make any 4 ice cream cone)

(Take the help from given picture)



2. a) Based on your visit to any place during summer vacations, complete the following table:-

	Cost in figures	Cost in words
Cost of travelling		
Expenditure of shopping		
Money spent on food		
Total		

b) Arrange the expenditure in ascending and descending order.

b) Read any story from your course book and complete the following format for story review:-
 (Do it in a A-4 size sheet)

Plot

What happens in the story?

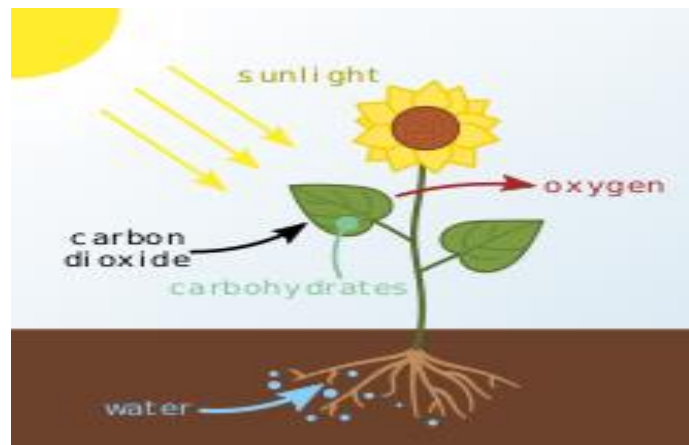
Characters	The story	Settings
Name \$ Describe	Title Author	Where and when

Problem	Solution
Describe the problem in the story	Describe how the problem was solved

SCIENCE:-

Answer the following questions on the basis of the picture given below:(Do it on a A-4 Size sheet)

- a) What is source of energy in the photosynthesis?
- b) Name the gas released.
- c) Which part trap sunlight?
- d) What is the function of stomata?
- e) Is photosynthesis can take place in night?



b) Make a wall hanging of parts of plants . (In any shape , take the help from the picture given below)

